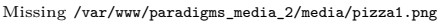
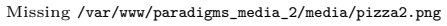
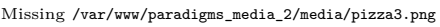


You like pizza and you like cola. Which of the graphs below represents your happiness as a function of how many pizzas and how much cola you have if ...

1. ... there is no such thing as too many pizzas and too much cola?
2. ... there is such a thing as too many pizzas or too much cola?
3. ... there is such a thing as too much cola but no such thing as too many pizzas?

A 

B 

C 

D 